

Y1 Morning Maths Revision Bubbles - SUMMER

MONDAY

Calculate:

$$20 = _ + _$$

TUESDAY

Calculate:

$$15 = 9 + _$$

WEDNESDAY

Find one more/less

$$_ \leftarrow 30 \rightarrow _$$

THURSDAY

Calculate:


$$20 = 17 + _$$

FRIDAY


Find one more/less

$$_ \leftarrow 40 \rightarrow _$$

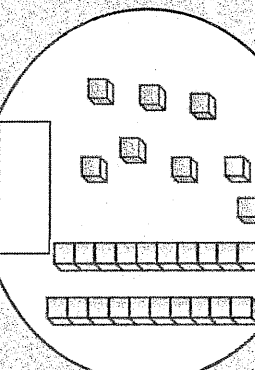
How many?



How many?



What's the number?



Complete:

$$22, 20, _, _$$

Complete:

$$24, 26, _, _$$

Complete:

$$43, 42, 41, _, _$$

Complete:

$$51, 50, _, _, _$$

Complete

$$87, 88, _, _$$

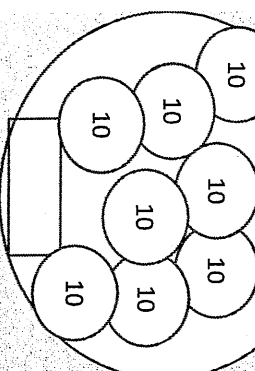
Complete:

$$96, 97, _, _$$


Complete:

$$13 + _ = 20$$

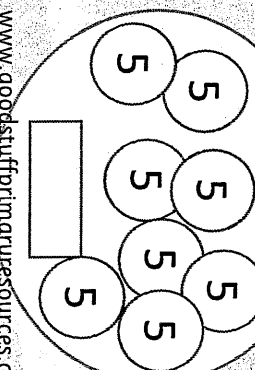
How much altogether?



How much altogether?



How much altogether?



Calculate:

$$19 + 5 =$$

Calculate:

$$9 + _ = 20$$