
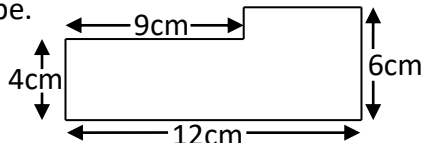
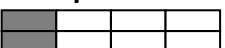
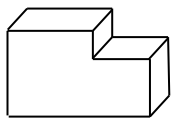



Name: _____

Date: _____

Class/Group: _____

A: Place Value, Add and Subtract		B: Multiply, Divide and Fractions		C: Measure and Problem Solving	
1. What is the value of the 4 in this number? 1,348,567	5:1	11. Which is a common factor of 12 and 20? 3 4 5 6 10	5:8	21. Megan and Joe are sharing a pizza. Megan eats 25% of the pizza. Joe eats $\frac{1}{2}$ of the pizza. What fraction of the pizza is left?	5:19
2. Write eight hundred thousand, three hundred and seven in digits.	5:1	12. Give two prime numbers between 1 and 10.	5:9		
3. Round 247,599 to the nearest thousand .	5:2	13. 628×12	5:10	22. How many centimetres are there in 3.7 metres ?	5:20
4. What is the missing number? 837 937 <input type="text"/> 1,137	5:2	14. $1,278 \div 100$	5:11		
5. What temperature is 15 degrees less than 6 degrees Celsius?	5:3	15. What is 7² ?	5:12	23. Calculate the perimeter of this shape. 	5:21
6. What number is represented by these Roman Numerals? DXXX	5:4	16. $\frac{3}{4} + \frac{1}{8} =$	5:13		
7. $12,498 - 3,149 =$	5:5	17. Find an equivalent fraction of $\frac{1}{4}$. 	5:14	24. Estimate the volume of this shape. Write a, b or c. a. 6 cm ³ . b. 26 cm ³ . c. 46 cm ³ . 	5:22
8. $24,829 + 83,592 =$	5:5	18. Write $\frac{17}{6}$ as a mixed number .	5:15	 1cm ³	
9. Complete this sum without written working. $15,200 - 4,150 =$	5:6	19. $\frac{2}{7} \times 21 =$	5:16	25. Sarah gets on a train at 2.30pm . The train journey lasts 110 minutes . What time does Sarah arrive at her destination?	5:23
10. I buy 2 CDs costing £8.45 each. How much change do I get from £20?	5:7	20. Round 2.37 to 1 decimal place.	5:17		
Total (A)		Total (B)		Total (C)	
Test Total (A+B+C)		R (0-9)	Y (10-19)	G (20-25)	