

An illustration of two people standing in front of a building with a clock tower. The person on the left is wearing a thick, cream-colored winter coat with a fur-lined hood and a large pocket. The person on the right is wearing a dark blue and grey jacket with a light blue scarf. The background shows a brown building with a clock tower, a green lawn, and a blue sky with white clouds. The title 'Planning a Route' is written in large, bold, pink letters with a white outline across the center of the image.

Planning a Route

Aim

- I can plan a journey using the eight compass points and four or six-figure grid references.

Success Criteria

- I can give directions using the eight compass points.
- I can give four or six-figure co-ordinates for a location.

Grid References – Answers

What can you find at these points?

(33,45)

warehouse

(34,42)

depot

(315,416)

school

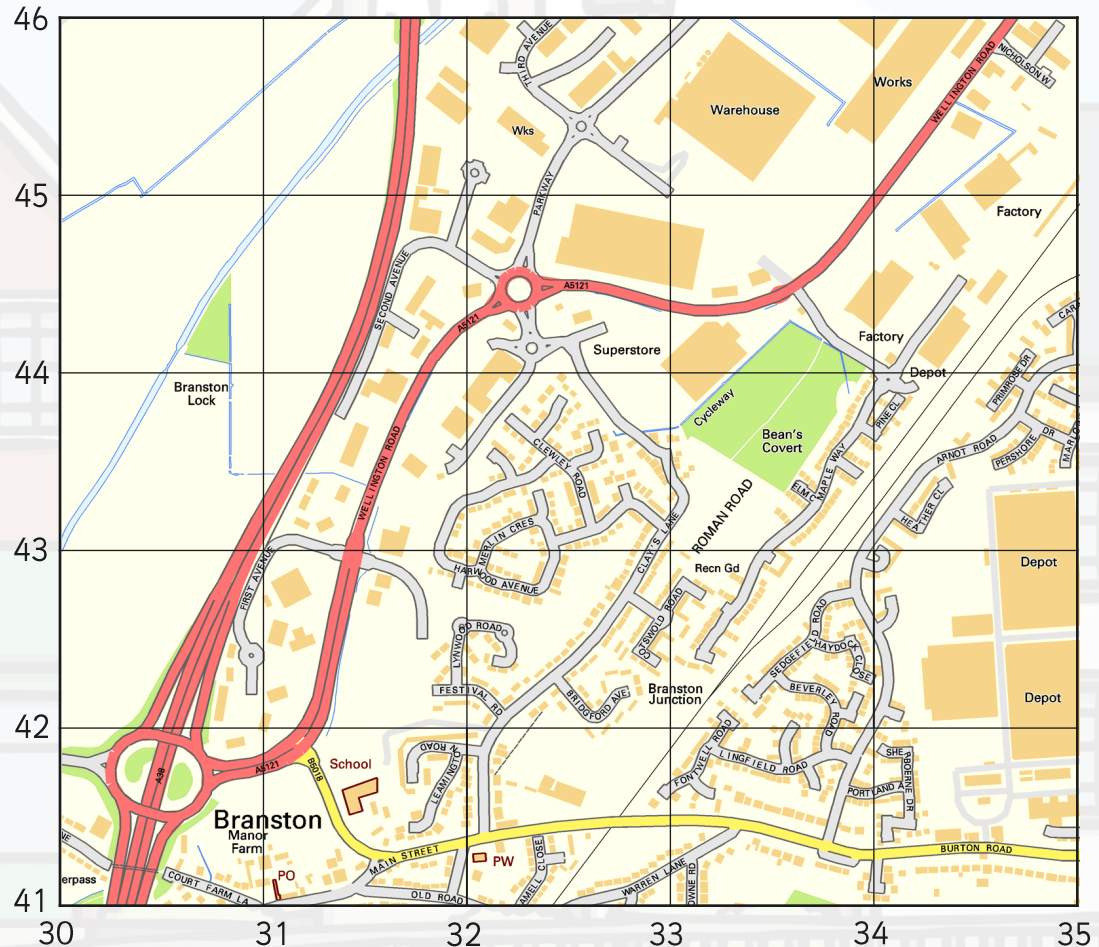
Which roads meet here?

(30,41)

A38 and A5121

What are the co-ordinates for the place of worship?

(321,413)



Putting It Together

Start at:

(33,45)

Then travel
south to:

(33,43)

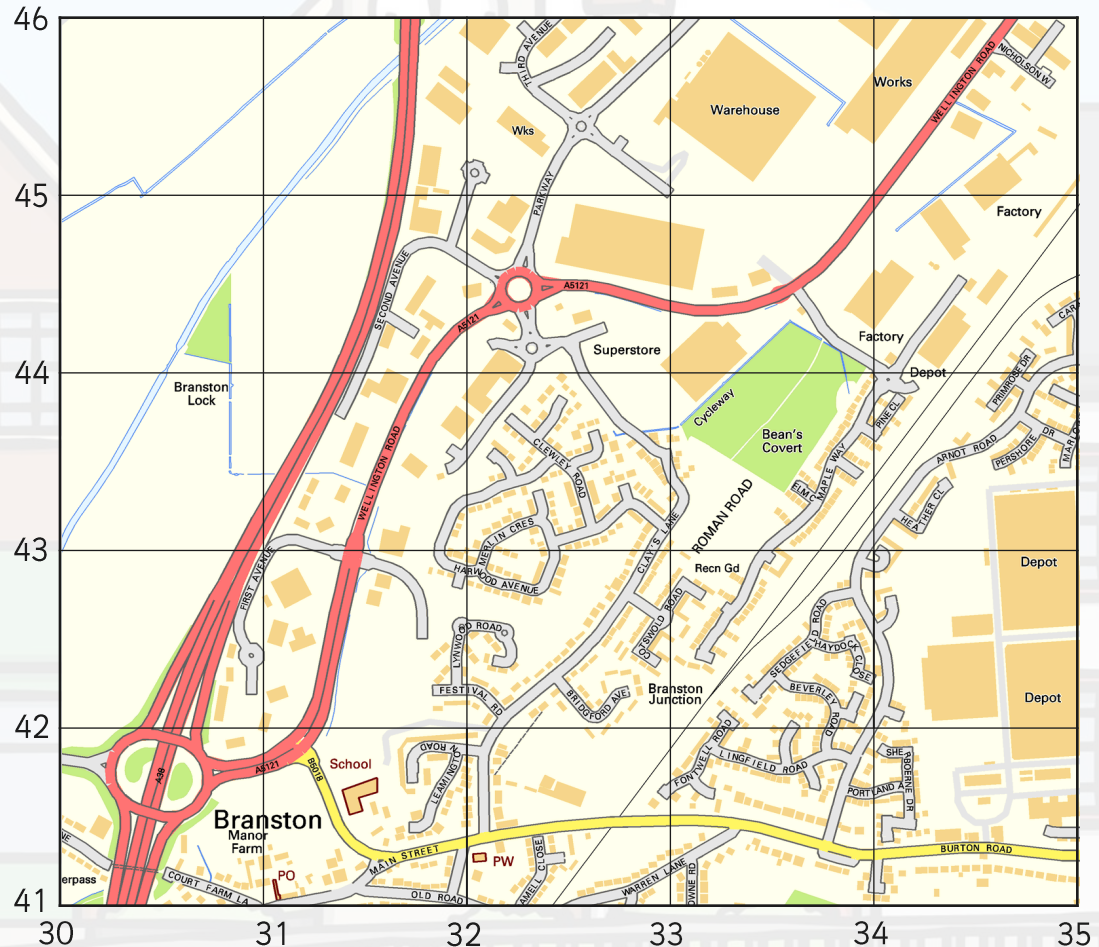
Finally travel
south west to:

(31,41)

Where did you visit?

**Write the places in
your exercise book.**

How would you describe the
journey from the Post Office
to the Roman Road and then
on to the superstore?



Putting It Together

Start at:

(33,45)

Then travel
south to:

(33,43)

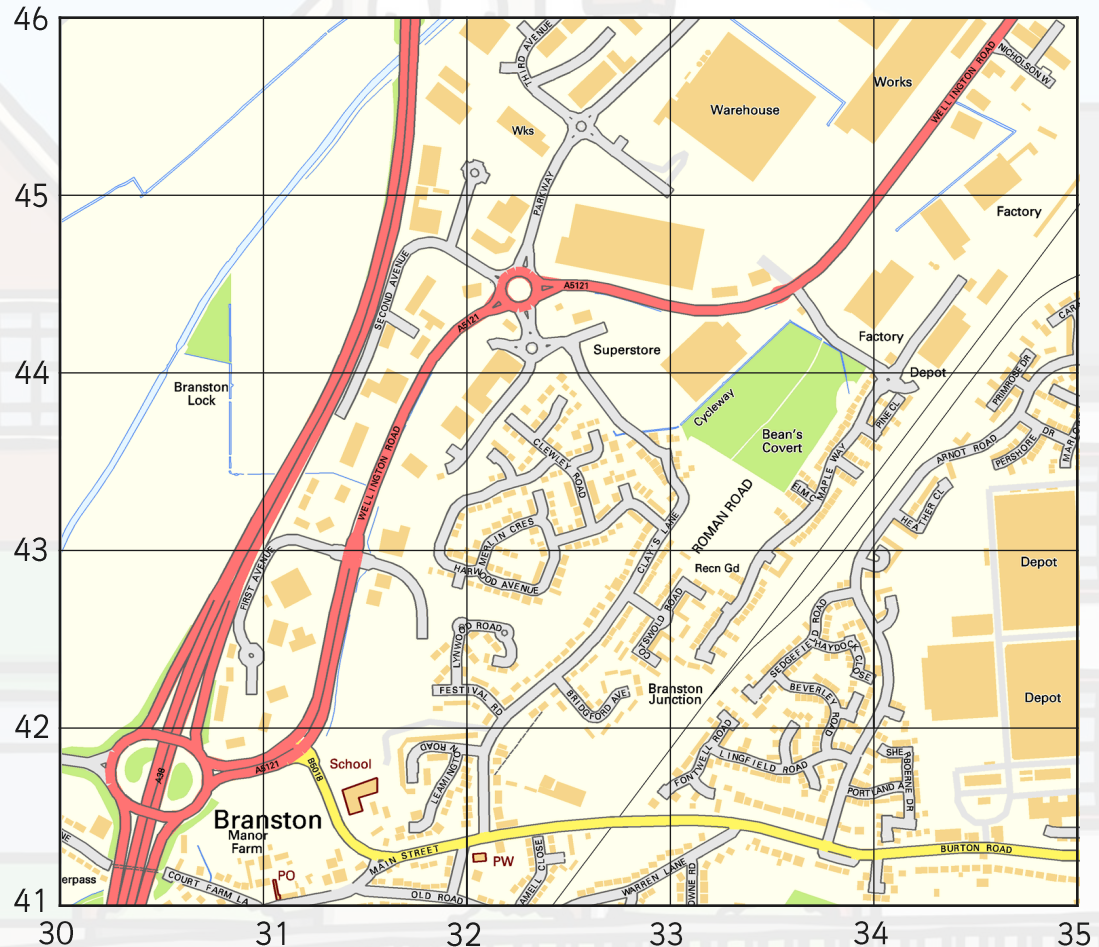
Finally travel
south west to:

(31,41)

Where did you visit?

Warehouse, Bean's
Covert, School.

How would you describe the
journey from the Post Office
to the Roman Road and then
on to the superstore?



Where Shall We Go?


Task

Plan a journey around your map – record on the activity sheet provided. Use the map in the previous slides.

You must visit at least 5 places of interest.

Make sure you record the co-ordinates and direction of travel each time.

Get a parent or sibling to follow your instructions. Were your instructions clear?



How Could We Walk Our Route?

Now we have planned a route, how could we follow it?

We could use a compass to help us find our way using the map.



Watch this video from 3:00 to 3:54 to see how a compass and map can be used to navigate.