



Can I tell the time to the nearest 5 minutes and draw the time to the nearest 5 minutes?

Write the times shown below with numbers and by writing the number of minutes past the hour.



2:15 or
15 minutes after
2 o'clock



_____ or
_____ minutes after
_____ o'clock



_____ or
_____ minutes after
_____ o'clock



_____ or
_____ minutes after
_____ o'clock




_____ or
_____ minutes after
_____ o'clock



_____ or
_____ minutes after
_____ o'clock



_____ or
_____ minutes after
_____ o'clock




_____ or
_____ minutes after
_____ o'clock

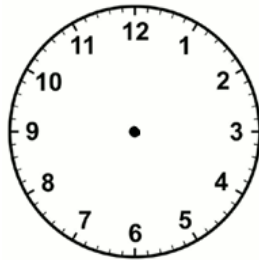


_____ or
_____ minutes after
_____ o'clock


Can you draw the times on these clocks? Be careful with the hour hand – remember that it moves too!!!



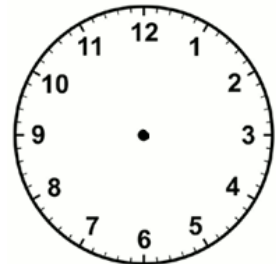
7:20



2:35



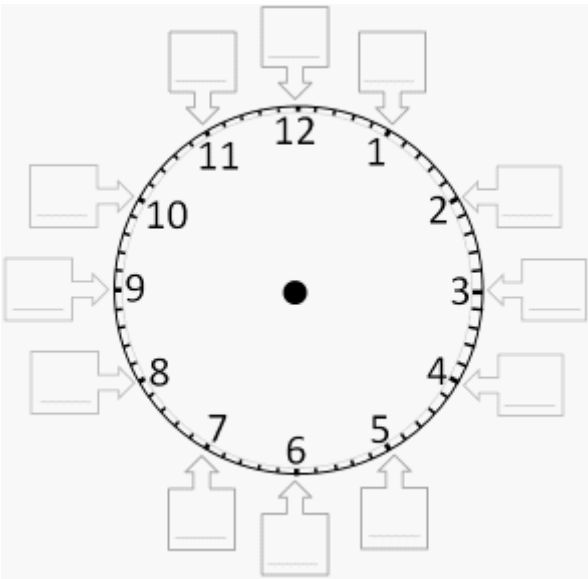
10:05



6:55

Can I count in 5s around the clock then use this to tell the time to the nearest 5 minutes?

Count around the clock by fives starting with 0 above the 12 hour number.



Write the times shown below with numbers and by writing the number of minutes past the hour.




2:15











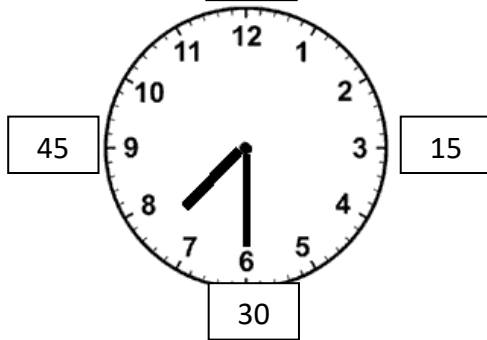






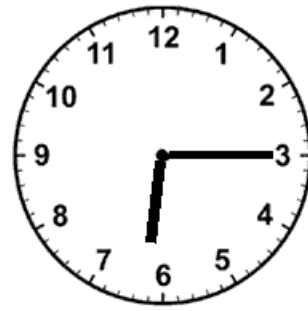
Can I tell the time to the hour, half and quarter hour?

00



Time is: 7:30

In words: Half past 7.



Time is: _____

In words: _____



Time is: _____

In words: _____




Time is: _____

In words: _____



Time is: _____

In words: _____



Time is: _____

In words: _____



Time is: _____

In words: _____



Time is: _____

In words: _____